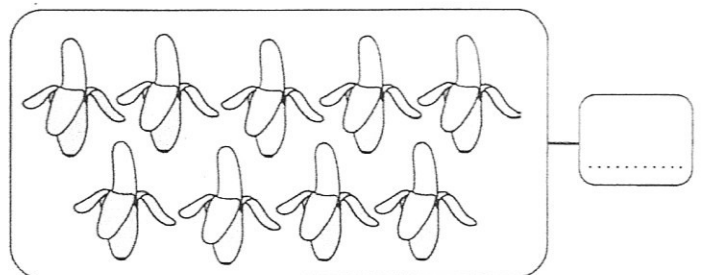
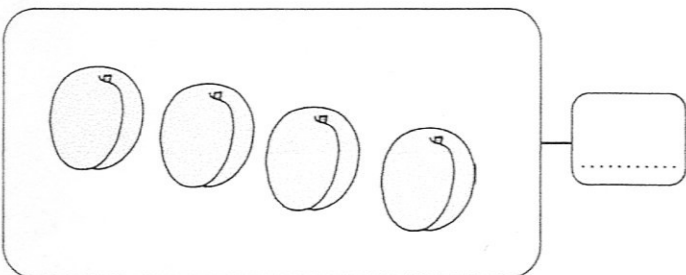

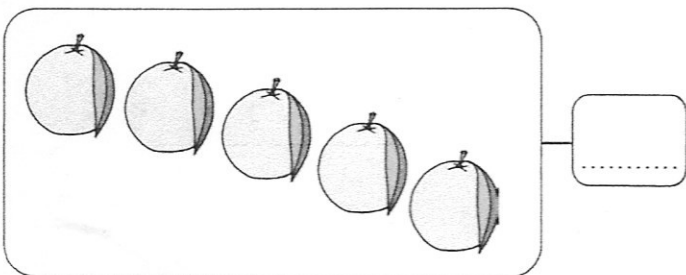
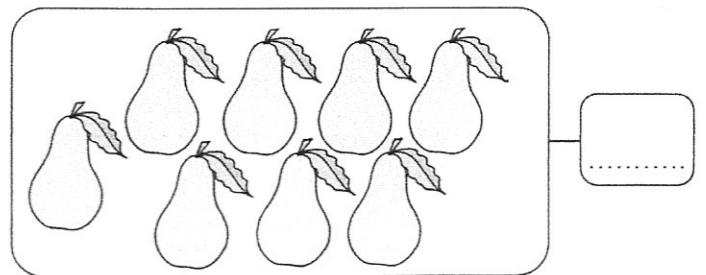
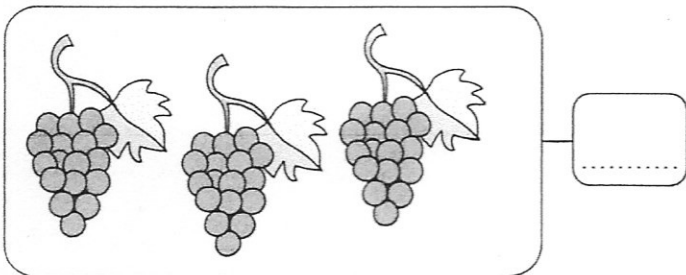
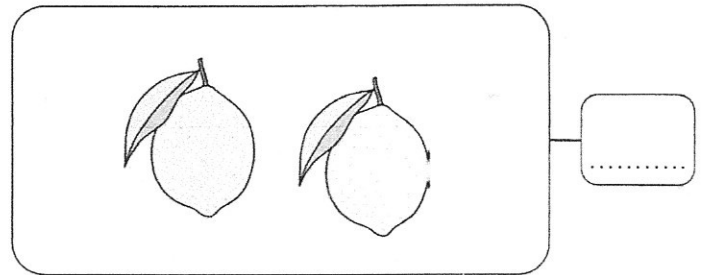


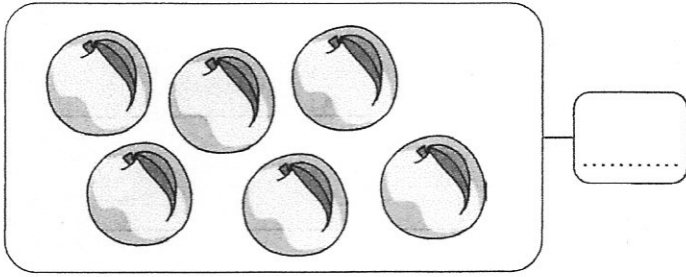



🌀 **Scrivi il numero di frutti di ogni gruppo.**




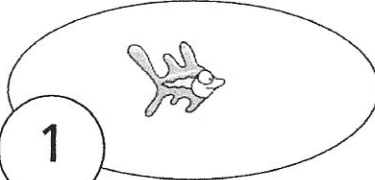


Completa e collega da 1 a 9.





2


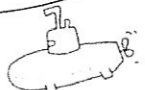
1



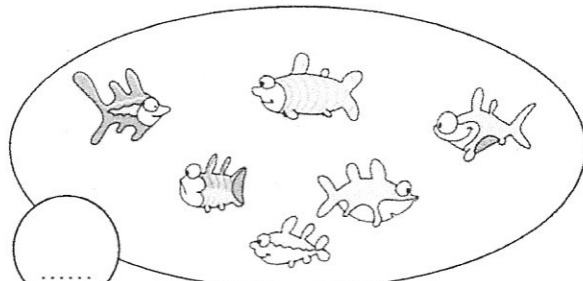
.....



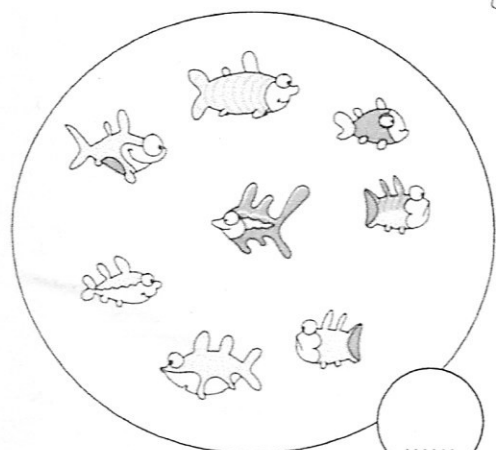
.....




.....



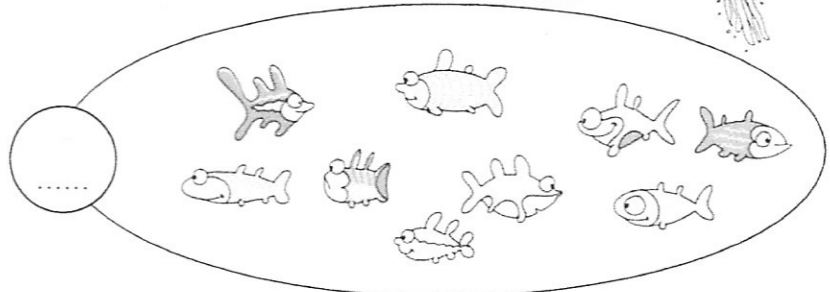
.....



.....



.....



.....

☉ Completa con i simboli > o <.

1 ○ 2

4 ○ 3

5 ○ 4


5 ○ 7

2 ○ 4

8 ○ 0

1 ○ 4

5 ○ 6



2 ○ 3

4 ○ 6

6 ○ 3

9 ○ 8

7 ○ 1

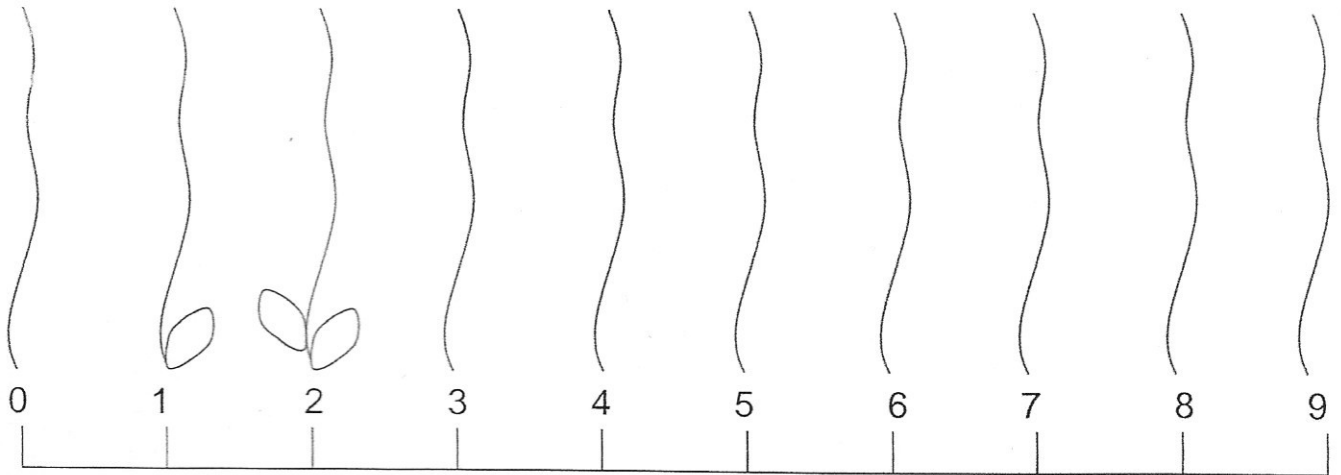
3 ○ 2

7 ○ 9

6 ○ 2

COGNOME.....NOME.....

 PER OGNI NUMERO DISEGNA SULLO STELO LA QUANTITÀ CORRISPONDENTE DI FOGLIE.



 OSSERVA LA LINEA DEI NUMERI E SCRIVI IL NUMERO CHE **PRECEDE**.

	8		9
	5		6
	3		1

 OSSERVA LA LINEA DEI NUMERI E SCRIVI IL NUMERO CHE **SEGUE**.

7		0	
4		2	
1		6	

 CONFRONTA LE COPPIE DI NUMERI USANDO I SIMBOLI > < =

9  6

5  5

7  4

7  7

9  9

2  3

3  5

4  7

6  9

0  1

2  1

6  6

 RISCRIVI I NUMERI NELL'ORDINE INDICATO.

CRESCENTE

6	3	1	9	4

DECRESCENTE

7	2	0	9	6

PROBLEMI ILLUSTRATI CON LE ADDIZIONI

 OSSERVA, RAGIONA, CONTA E RISPONDI.

LE MASCHERE




QUANTE MASCHERE DA SPIDERMAN? \_\_\_\_  
QUANTE MASCHERE DA FARFALLA? \_\_\_\_  
QUANTE MASCHERE IN TUTTO? \_\_\_\_

RISOLVO IL PROBLEMA CON L'OPERAZIONE

\_\_\_ + \_\_\_ = \_\_\_\_

I DOLCI




QUANTI BIGNÈ? \_\_\_\_  
QUANTI CORNETTI? \_\_\_\_  
QUANTI DOLCI IN TUTTO? \_\_\_\_

RISOLVO IL PROBLEMA CON L'OPERAZIONE

\_\_\_ + \_\_\_ = \_\_\_\_

GLI ANIMALI




QUANTE RANE? \_\_\_\_  
QUANTE PAPERE? \_\_\_\_  
QUANTI ANIMALI IN TUTTO? \_\_\_\_

RISOLVO IL PROBLEMA CON L'OPERAZIONE

\_\_\_ + \_\_\_ = \_\_\_\_

LE BARCHE



QUANTE BARCHE GRANDI? \_\_\_\_  
QUANTE BARCHE PICCOLE? \_\_\_\_  
QUANTE BARCHE IN TUTTO? \_\_\_\_

RISOLVO IL PROBLEMA CON L'OPERAZIONE

\_\_\_ + \_\_\_ = \_\_\_\_

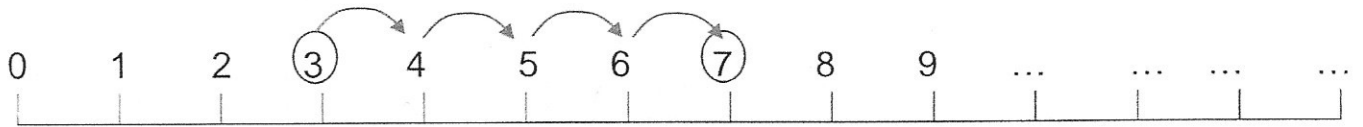


DA CHE PARTE  
VADO CON IL + ?


COGNOME.....

NOME.....

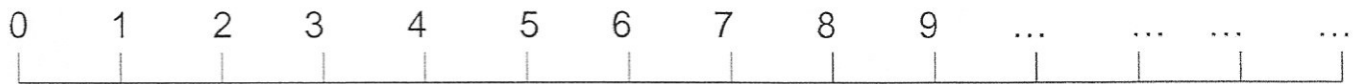
ESEGUI LE ADDIZIONI




$3 + 4 = 7$



$5 + 3 = \underline{\quad}$




$3 + 3 = \underline{\quad}$



$6 + 3 = \underline{\quad}$



$1 + 5 = \underline{\quad}$



$0 + 4 = \underline{\quad}$



$7 + 2 = \underline{\quad}$

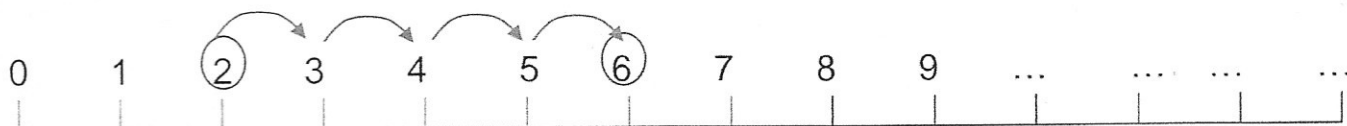


DA CHE PARTE  
VADO CON IL + ?

COGNOME.....

NOME.....

ESEGUI LE ADDIZIONI




$2 + 4 = 6$



$6 + 2 = \underline{\quad}$




$7 + 1 = \underline{\quad}$




$4 + 1 = \underline{\quad}$



$8 + 0 = \underline{\quad}$



$4 + 5 = \underline{\quad}$



$1 + 3 = \underline{\quad}$